



NEDFi North Eastern Development Finance Corporation Limited

Notations :

- 1.Options shown in green color and with  icon are correct.
- 2.Options shown in red color and with  icon are incorrect.

Question Paper Name :	Junior Executive Officer3
Subject Name :	NEDFi Recruitment of Junior Executive Officer 2022
Creation Date :	2022-10-26 18:03:06
Duration :	90
Total Marks :	100
Display Marks:	Yes
Calculator :	None
Magnifying Glass Required? :	No
Ruler Required? :	No
Eraser Required? :	No
Scratch Pad Required? :	No
Rough Sketch/Notepad Required? :	No
Protractor Required? :	No
Show Watermark on Console? :	Yes
Highlighter :	No
Auto Save on Console?	Yes
Change Font Color :	No
Change Background Color :	No
Change Theme :	No
Help Button :	No
Show Reports :	No
Show Progress Bar :	No

NEDFi Recruitment of Junior Executive Officer 2022

Group Number :	1
Group Id :	1860757
Group Maximum Duration :	0
Group Minimum Duration :	90
Show Attended Group? :	No
Edit Attended Group? :	No
Break time :	0
Group Marks :	100
Is this Group for Examiner? :	No
Examiner permission :	Cant View
Show Progress Bar? :	No

General English

Section Id :	18607525
Section Number :	1
Section type :	Online
Mandatory or Optional :	Mandatory
Number of Questions :	17
Number of Questions to be attempted :	17
Section Marks :	20
Enable Mark as Answered Mark for Review and Clear Response :	Yes
Maximum Instruction Time :	0
Sub-Section Number :	1
Sub-Section Id :	18607531
Question Shuffling Allowed :	Yes
Is Section Default? :	null

Question Number : 1 Question Id : 186075203 Question Type : MCQ Option Shuffling : No Is Question Mandatory : No Calculator :
None Response Time : N.A Think Time : N.A Minimum Instruction Time : 0 Allowed Progression : Yes Number of Replay : 999 Play On
Load : No Control Enable : Yes Time interval to replay(In Seconds) : 0 Allow Volume Control : No
Correct Marks : 1 Wrong Marks : 0.25

Select the most appropriate meaning of the given idiom.

Blow hot and cold

Options :

1. ☒ Change mood frequently about something or someone
2. ☐ Change mood during summers
3. ☐ Change mood when one is happy
4. ☐ Change mood very rarely and stay calm

Question Number : 2 Question Id : 186075204 Question Type : MCQ Option Shuffling : No Is Question Mandatory : No Calculator : None Response Time : N.A Think Time : N.A Minimum Instruction Time : 0 Allowed Progression : Yes Number of Replay : 999 Play On Load : No Control Enable : Yes Time interval to replay(In Seconds) : 0 Allow Volume Control : No

Correct Marks : 1 Wrong Marks : 0.25

Select the option that will improve the underlined part of the given sentence. In case no improvement is needed, select 'No change'.

I'll end up going carrots if I have to work in this office for one more day!

Options :

1. ☐ going coconuts
2. ☐ going potatoes
3. ☒ going bananas
4. ☐ No change

Question Number : 3 Question Id : 186075205 Question Type : MCQ Option Shuffling : No Is Question Mandatory : No Calculator : None Response Time : N.A Think Time : N.A Minimum Instruction Time : 0 Allowed Progression : Yes Number of Replay : 999 Play On Load : No Control Enable : Yes Time interval to replay(In Seconds) : 0 Allow Volume Control : No

Correct Marks : 1 Wrong Marks : 0.25

Select the most appropriate meaning of the given proverb.

Cross the stream where it is shallowest

Options :

1. ☐ Do things haphazardly
2. ☐ Do things quickly
3. ☒ Do things in the easiest possible way
4. ☐ Do things rashly

Question Number : 4 Question Id : 186075206 Question Type : MCQ Option Shuffling : No Is Question Mandatory : No Calculator : None Response Time : N.A Think Time : N.A Minimum Instruction Time : 0 Allowed Progression : Yes Number of Replay : 999 Play On Load : No Control Enable : Yes Time interval to replay(In Seconds) : 0 Allow Volume Control : No

Correct Marks : 1 Wrong Marks : 0.25

Select the most appropriate ANTONYM of the given word.

Defile

Options :

1. ✖ Contaminate
2. ✔ Purify
3. ✖ Desecrate
4. ✖ Vitiate

Question Number : 5 Question Id : 186075207 Question Type : MCQ Option Shuffling : No Is Question Mandatory : No Calculator : None Response Time : N.A Think Time : N.A Minimum Instruction Time : 0 Allowed Progression : Yes Number of Replay : 999 Play On Load : No Control Enable : Yes Time interval to replay(In Seconds) : 0 Allow Volume Control : No

Correct Marks : 1 Wrong Marks : 0.25

Select the sentence that has NO spelling error.

Options :

1. ✖ The emotional and psychological attachment that we develop with our friends is essential to keep us going.
2. ✔ The emotional and psychological attachments that we develop with our friends is essential to keep us going.
3. ✖ The emotonal and psychological attachments that we develop with our friends is essential to keep us going.
4. ✖ The emotional and psychological atachments that we develop with our friends is essential to keep us going.

Question Number : 6 Question Id : 186075208 Question Type : MCQ Option Shuffling : No Is Question Mandatory : No Calculator : None Response Time : N.A Think Time : N.A Minimum Instruction Time : 0 Allowed Progression : Yes Number of Replay : 999 Play On Load : No Control Enable : Yes Time interval to replay(In Seconds) : 0 Allow Volume Control : No

Correct Marks : 1 Wrong Marks : 0.25

Select the correctly spelt word to fill in the blank.

He _____ his opponent in the last election.

Options :

1. ✖ annihilated
2. ✖ annehilated
3. ✖ annihelated
4. ✔ annihilated

Question Number : 7 Question Id : 186075209 Question Type : MCQ Option Shuffling : No Is Question Mandatory : No Calculator : None Response Time : N.A Think Time : N.A Minimum Instruction Time : 0 Allowed Progression : Yes Number of Replay : 999 Play On Load : No Control Enable : Yes Time interval to replay(In Seconds) : 0 Allow Volume Control : No

Correct Marks : 1 Wrong Marks : 0.25

Sentences of a paragraph are given below. While the first and the last sentences (S1 and S6) are in the correct order, the sentences in between are jumbled up. Arrange the sentences in the correct order to form a meaningful and coherent paragraph.

S1) A boy named Peter was upset. His father found him crying.

P) Once the bowls had cooled down, Peter's father asked him to feel the texture of the different food items again.

Q) When his father asked Peter why he was crying, he said that he had a lot of problems in his life.

R) He then asked Peter to feel their texture and then fill each bowl with water. Peter did as he had been told. His father then boiled all three bowls.

S) His father simply smiled and asked him to get a potato, an egg, and some coffee beans. He placed them in three bowls.

S6) Peter noticed that the potato had become soft and its skin was peeling off easily; the egg had become harder; the coffee beans had completely changed and filled the bowl of water with aroma and flavour.

Options :

1. ✖ PQRS
2. ✔ QSRP
3. ✖ PRSQ
4. ✖ QPRS

Question Number : 8 Question Id : 186075210 Question Type : MCQ Option Shuffling : No Is Question Mandatory : No Calculator : None Response Time : N.A Think Time : N.A Minimum Instruction Time : 0 Allowed Progression : Yes Number of Replay : 999 Play On Load : No Control Enable : Yes Time interval to replay(In Seconds) : 0 Allow Volume Control : No

Correct Marks : 1 Wrong Marks : 0.25

Select the option that can be used as a one-word substitute for the given group of words.

A room fitted with extensive areas of glass to admit sunlight where people can sunbathe.

Options :

1. ✖ Spa
2. ✖ Planetarium

3. ✖ Sanatorium

4. ✔ Solarium

Question Number : 9 Question Id : 186075211 Question Type : MCQ Option Shuffling : No Is Question Mandatory : No Calculator : None Response Time : N.A Think Time : N.A Minimum Instruction Time : 0 Allowed Progression : Yes Number of Replay : 999 Play On Load : No Control Enable : Yes Time interval to replay(In Seconds) : 0 Allow Volume Control : No

Correct Marks : 1 Wrong Marks : 0.25

Select the sentence in which the correct adjective is used.

Options :

1. ✖ Sunil is bravest men in his battalion.

2. ✔ Sunil is one of the bravest men in his battalion.

3. ✖ Sunil is the braver men in his battalion.

4. ✖ Sunil is brave men in his battalion.

Question Number : 10 Question Id : 186075212 Question Type : MCQ Option Shuffling : No Is Question Mandatory : No Calculator : None Response Time : N.A Think Time : N.A Minimum Instruction Time : 0 Allowed Progression : Yes Number of Replay : 999 Play On Load : No Control Enable : Yes Time interval to replay(In Seconds) : 0 Allow Volume Control : No

Correct Marks : 1 Wrong Marks : 0.25

Select the sentence in which the correct conjunction is used.

Options :

1. ✖ I tried to hit the nail yet hit my thumb instead.

2. ✖ I tried to hit the nail because hit my thumb instead.

3. ✔ I tried to hit the nail but hit my thumb instead.

4. ✖ I tried to hit the nail although hit my thumb instead.

Question Number : 11 Question Id : 186075213 Question Type : MCQ Option Shuffling : No Is Question Mandatory : No Calculator : None Response Time : N.A Think Time : N.A Minimum Instruction Time : 0 Allowed Progression : Yes Number of Replay : 999 Play On Load : No Control Enable : Yes Time interval to replay(In Seconds) : 0 Allow Volume Control : No

Correct Marks : 1 Wrong Marks : 0.25

Select the most appropriate preposition to fill in the blank.

I looked _____ the house for the keys but couldn't find them.

Options :

1. ✖ among
2. ✖ from
3. ✖ at
4. ✔ around

Question Number : 12 Question Id : 186075214 Question Type : MCQ Option Shuffling : No Is Question Mandatory : No Calculator : None Response Time : N.A Think Time : N.A Minimum Instruction Time : 0 Allowed Progression : Yes Number of Replay : 999 Play On Load : No Control Enable : Yes Time interval to replay(In Seconds) : 0 Allow Volume Control : No

Correct Marks : 1 Wrong Marks : 0.25

Select the most appropriate phrasal verb to fill in the blank.

Our car _____ at the side of the highway during the snowstorm.

Options :

1. ✔ broke down
2. ✖ broke up
3. ✖ broke in
4. ✖ broke into

Question Number : 13 Question Id : 186075215 Question Type : MCQ Option Shuffling : No Is Question Mandatory : No Calculator : None Response Time : N.A Think Time : N.A Minimum Instruction Time : 0 Allowed Progression : Yes Number of Replay : 999 Play On Load : No Control Enable : Yes Time interval to replay(In Seconds) : 0 Allow Volume Control : No

Correct Marks : 1 Wrong Marks : 0.25

Select the sentence that has the correct phrasal verb.

Options :

1. ✖ Please cross into your old address and write your new one.
2. ✖ Please cross against your old address and write your new one.
3. ✔ Please cross out your old address and write your new one.
4. ✖ Please cross up your old address and write your new one.

Question Number : 14 Question Id : 186075216 Question Type : MCQ Option Shuffling : No Is Question Mandatory : No Calculator : None Response Time : N.A Think Time : N.A Minimum Instruction Time : 0 Allowed Progression : Yes Number of Replay : 999 Play On Load : No Control Enable : Yes Time interval to replay(In Seconds) : 0 Allow Volume Control : No

Correct Marks : 1 Wrong Marks : 0.25

Select the sentence in which the future tense has been used correctly.

Options :

1. ✓ I will meet you in the evening.
2. ✗ I was meet you in the evening.
3. ✗ I have meet you in the evening.
4. ✗ I am meet you in the evening.

Question Number : 15 Question Id : 186075217 Question Type : MCQ Option Shuffling : No Is Question Mandatory : No Calculator : None Response Time : N.A Think Time : N.A Minimum Instruction Time : 0 Allowed Progression : Yes Number of Replay : 999 Play On Load : No Control Enable : Yes Time interval to replay(In Seconds) : 0 Allow Volume Control : No

Correct Marks : 1 Wrong Marks : 0.25

Select the sentence in which the past tense has been used correctly.

Options :

1. ✗ We was see a good film last week.
2. ✗ We see a good film last week.
3. ✓ We saw a good film last week.
4. ✗ We seen a good film last week.

Question Number : 16 Question Id : 186075218 Question Type : MCQ Option Shuffling : No Is Question Mandatory : No Calculator : None Response Time : N.A Think Time : N.A Minimum Instruction Time : 0 Allowed Progression : Yes Number of Replay : 999 Play On Load : No Control Enable : Yes Time interval to replay(In Seconds) : 0 Allow Volume Control : No

Correct Marks : 1 Wrong Marks : 0.25

Select the sentence in which the present tense has been used correctly.

Options :

1. ✗ The movie resume within a few minutes.
2. ✗ The movie resumed within a few minutes.
3. ✗ The movie is resumes within a few minutes.
4. ✓ The movie resumes within a few minutes.

Sub-Section Number :	2
Sub-Section Id :	18607532
Question Shuffling Allowed :	No
Is Section Default? :	null

Question Id : 186075219 Question Type : COMPREHENSION Sub Question Shuffling Allowed : Yes Group Comprehension Questions : No Question Pattern Type : NonMatrix Calculator : None Response Time : N.A Think Time : N.A Minimum Instruction Time : 0 Allowed Progression : Yes Number of Replay : 999 Play On Load : No Control Enable : Yes Time interval to replay(In Seconds) : 0 Allow Volume Control : No

Question Numbers : (17 to 20)

Read the given passage and answer the questions that follow.

A sparrow is a small bird which is found throughout the world. There are many different species of sparrows seen all over the world. Sparrows are very small only about four to six inches in length. Many people appreciate their beautiful song. Sparrows prefer to build their nests in low places – usually on the ground, clumps of grass, low trees and low bushes. In cities, they build their nests in building nooks or holes in the walls. They rarely build their nests in high places. They build their nests out of twigs, grasses and plant fibres. Their nests are usually small and well-built structures.

Male sparrows are brightly coloured birds with grey heads, white cheeks, a black bib and rufous neck – although in cities you may see some that are dull and grubby. Females are a plain buffy-brown overall with dingy grey-brown underparts. Their backs are noticeably striped with buff, black and brown.

Female sparrows lay about four to six eggs at a time. The eggs are white with reddish brown spots. They hatch within eleven to fourteen days. Both the male and female parents take care of their young ones. Insects are fed to the young after hatching. The large feet of the sparrows are used for scratching seeds. The adult sparrows mainly eat seeds. Sparrows can be found almost everywhere, where there are humans. Many people throughout the world enjoy watching these delightful birds.

The sparrows are some of the few birds that engage in dust bathing. Sparrows first scratch a hole in the ground with their feet, then lie in it and fling dirt or sand over their bodies with flicks of their wings. They also bathe in water, or in dry or melting snow. Water bathing is similar to dust bathing, with the sparrow standing in shallow water and flicking water over its back with its wings, also ducking its head under the water. Both activities are social, with up to a hundred birds participating at once, and is followed by preening and sometimes group singing.

Sub questions

Question Number : 17 Question Id : 186075220 Question Type : MCQ Option Shuffling : No Is Question Mandatory : No Calculator : None Response Time : N.A Think Time : N.A Minimum Instruction Time : 0 Allowed Progression : Yes Number of Replay : 999 Play On Load : No Control Enable : Yes Time interval to replay(In Seconds) : 0 Allow Volume Control : No

Correct Marks : 1 Wrong Marks : 0.25

Select the most appropriate title for the given passage.

Options :

1. ❌ The Smallest Bird
2. ✔ A Common Small Bird

3. ✖ An Uncommon Bird
4. ✖ One of the Strangest Bird

Question Number : 18 Question Id : 186075221 Question Type : MCQ Option Shuffling : No Is Question Mandatory : No Calculator : None Response Time : N.A Think Time : N.A Minimum Instruction Time : 0 Allowed Progression : Yes Number of Replay : 999 Play On Load : No Control Enable : Yes Time interval to replay(In Seconds) : 0 Allow Volume Control : No
Correct Marks : 1 Wrong Marks : 0.25

What is the structure of the passage?

Options :

1. ✔ Descriptive
2. ✖ Sequential
3. ✖ Cause and effect
4. ✖ Compare/contrast

Question Number : 19 Question Id : 186075222 Question Type : MCQ Option Shuffling : No Is Question Mandatory : No Calculator : None Response Time : N.A Think Time : N.A Minimum Instruction Time : 0 Allowed Progression : Yes Number of Replay : 999 Play On Load : No Control Enable : Yes Time interval to replay(In Seconds) : 0 Allow Volume Control : No
Correct Marks : 1 Wrong Marks : 0.25

With reference to the passage, what does the word 'bib' mean?

Options :

1. ✖ A dark patch of feathers on the back.
2. ✖ A dark patch of feathers on the head.
3. ✔ A dark patch of feathers on the breast.
4. ✖ A dark patch of feathers on the wings.

Question Number : 20 Question Id : 186075223 Question Type : MCQ Option Shuffling : No Is Question Mandatory : No Calculator : None Response Time : N.A Think Time : N.A Minimum Instruction Time : 0 Allowed Progression : Yes Number of Replay : 999 Play On Load : No Control Enable : Yes Time interval to replay(In Seconds) : 0 Allow Volume Control : No
Correct Marks : 1 Wrong Marks : 0.25

Which word from the passage means the same as 'reddish brown in colour'?

Options :

1. ✖ Dingy
2. ✖ Buffy

3. ✖ Grubby

4. ✔ Rufous

General Knowledge, Economy and Banking Awareness.

Section Id :	18607526
Section Number :	2
Section type :	Online
Mandatory or Optional :	Mandatory
Number of Questions :	30
Number of Questions to be attempted :	30
Section Marks :	30
Enable Mark as Answered Mark for Review and Clear Response :	Yes
Maximum Instruction Time :	0
Sub-Section Number :	1
Sub-Section Id :	18607533
Question Shuffling Allowed :	Yes
Is Section Default? :	null

Question Number : 21 Question Id : 186075224 Question Type : MCQ Option Shuffling : No Is Question Mandatory : No Calculator :
None Response Time : N.A Think Time : N.A Minimum Instruction Time : 0 Allowed Progression : Yes Number of Replay : 999 Play On
Load : No Control Enable : Yes Time interval to replay(In Seconds) : 0 Allow Volume Control : No
Correct Marks : 1 Wrong Marks : 0.25

In 2022, the postmortem of _____ was conducted using a new technique called 'Virtual Autopsy'.

Options :





1. ✖ music director Bappi Lahiri
2. ✖ playback singer Lata Mangeshkar
3. ✖ Kathak maestro Pandit Birju Maharaj
4. ✔ comedian Raju Srivastava

Question Number : 22 Question Id : 186075225 Question Type : MCQ Option Shuffling : No Is Question Mandatory : No Calculator :
None Response Time : N.A Think Time : N.A Minimum Instruction Time : 0 Allowed Progression : Yes Number of Replay : 999 Play On
Load : No Control Enable : Yes Time interval to replay(In Seconds) : 0 Allow Volume Control : No

Correct Marks : 1 Wrong Marks : 0.25

The theme of the 6th India Mobile Congress held in New Delhi in October 2022 was '_____ '.

Options :





1.  New Digital Universe
2.  Inclusive Innovation - Smart, Secure and Sustainable
3.  Imagine a New Connected World; Intelligent, Immersive, Inventive
4.  New Digital Horizons - Connect, Create, Innovate

Question Number : 23 Question Id : 186075226 Question Type : MCQ Option Shuffling : No Is Question Mandatory : No Calculator : None Response Time : N.A Think Time : N.A Minimum Instruction Time : 0 Allowed Progression : Yes Number of Replay : 999 Play On Load : No Control Enable : Yes Time interval to replay(In Seconds) : 0 Allow Volume Control : No

Correct Marks : 1 Wrong Marks : 0.25

As per World Air Quality Report 2021 released by Swiss Organisation IQ Air, _____ of the 100 most polluted cities of the world are located in India.

Options :





1.  24
2.  42
3.  36
4.  63

Question Number : 24 Question Id : 186075227 Question Type : MCQ Option Shuffling : No Is Question Mandatory : No Calculator : None Response Time : N.A Think Time : N.A Minimum Instruction Time : 0 Allowed Progression : Yes Number of Replay : 999 Play On Load : No Control Enable : Yes Time interval to replay(In Seconds) : 0 Allow Volume Control : No

Correct Marks : 1 Wrong Marks : 0.25

As of September 2022, the Pradhan Mantri Kisan Mandhan Yojana is available to persons between the age of _____ years (at entry), subject to fulfillment of other conditions.

Options :

1.  25 and 70
2.  21 and 60
3.  15 and 30
4.  18 and 40

Question Number : 25 Question Id : 186075228 Question Type : MCQ Option Shuffling : No Is Question Mandatory : No Calculator : None Response Time : N.A Think Time : N.A Minimum Instruction Time : 0 Allowed Progression : Yes Number of Replay : 999 Play On Load : No Control Enable : Yes Time interval to replay(In Seconds) : 0 Allow Volume Control : No

Correct Marks : 1 Wrong Marks : 0.25

In September 2022, javelin thrower _____ became the first Indian to win the Diamond League Trophy.

Options :

1. ✖ Shivpal Yadav
2. ✖ Sahil Silwal
3. ✔ Neeraj Chopra
4. ✖ Yashvir Singh

Question Number : 26 Question Id : 186075229 Question Type : MCQ Option Shuffling : No Is Question Mandatory : No Calculator : None Response Time : N.A Think Time : N.A Minimum Instruction Time : 0 Allowed Progression : Yes Number of Replay : 999 Play On Load : No Control Enable : Yes Time interval to replay(In Seconds) : 0 Allow Volume Control : No

Correct Marks : 1 Wrong Marks : 0.25

In September 2022, the Union Cabinet cleared a financial outlay of Rs. _____ crore to the All-India Football Federation (AIFF), in preparation for hosting the Federation Internationale de Football Association (FIFA) Under 17 Women's World Cup 2022 in India.

Options :

1. ✖ 7
2. ✔ 10
3. ✖ 12
4. ✖ 15

Question Number : 27 Question Id : 186075230 Question Type : MCQ Option Shuffling : No Is Question Mandatory : No Calculator : None Response Time : N.A Think Time : N.A Minimum Instruction Time : 0 Allowed Progression : Yes Number of Replay : 999 Play On Load : No Control Enable : Yes Time interval to replay(In Seconds) : 0 Allow Volume Control : No

Correct Marks : 1 Wrong Marks : 0.25

As of October 2022, Dr. Himanta Biswa Sarma is/was the President of the _____.

Options :

1. ✖ Cycling Federation of India
2. ✔ Badminton Association of India
3. ✖ Indian Weightlifting Federation
4. ✖ All India Chess Federation

Question Number : 28 Question Id : 186075231 Question Type : MCQ Option Shuffling : No Is Question Mandatory : No Calculator : None Response Time : N.A Think Time : N.A Minimum Instruction Time : 0 Allowed Progression : Yes Number of Replay : 999 Play On Load : No Control Enable : Yes Time interval to replay(In Seconds) : 0 Allow Volume Control : No

Correct Marks : 1 Wrong Marks : 0.25

Which of the following dynasties ruled over Delhi from 1290 AD to 1320 AD?

Options :

1. ✓ Khalji/Khilji Dynasty
2. ✗ Sayyid Dynasty
3. ✗ Lodi/ Lodhi Dynasty
4. ✗ Tughluq/Tughlaq Dynasty

Question Number : 29 Question Id : 186075232 Question Type : MCQ Option Shuffling : No Is Question Mandatory : No Calculator : None Response Time : N.A Think Time : N.A Minimum Instruction Time : 0 Allowed Progression : Yes Number of Replay : 999 Play On Load : No Control Enable : Yes Time interval to replay(In Seconds) : 0 Allow Volume Control : No

Correct Marks : 1 Wrong Marks : 0.25

Which of the following emperors divided his inheritance to give each of his brothers a province, according to the will of his father?

Options :

1. ✗ Aurangzeb
2. ✗ Jahangir
3. ✗ Babur
4. ✓ Humayun

Question Number : 30 Question Id : 186075233 Question Type : MCQ Option Shuffling : No Is Question Mandatory : No Calculator : None Response Time : N.A Think Time : N.A Minimum Instruction Time : 0 Allowed Progression : Yes Number of Replay : 999 Play On Load : No Control Enable : Yes Time interval to replay(In Seconds) : 0 Allow Volume Control : No

Correct Marks : 1 Wrong Marks : 0.25

The Second Anglo-Maratha War was fought _____.

Options :





1. ✗ from 1830 to 1832
2. ✗ from 1812 to 1814
3. ✓ from 1803 to 1805
4. ✗ from 1826 to 1828

Question Number : 31 Question Id : 186075234 Question Type : MCQ Option Shuffling : No Is Question Mandatory : No Calculator : None Response Time : N.A Think Time : N.A Minimum Instruction Time : 0 Allowed Progression : Yes Number of Replay : 999 Play On Load : No Control Enable : Yes Time interval to replay(In Seconds) : 0 Allow Volume Control : No

Correct Marks : 1 Wrong Marks : 0.25

The Nawab of Awadh was forced to give over half of his territory to the East India Company in 1801, during the tenure of _____ as Governor-General of India.

Options :

1.  Richard Wellesley
2.  Warren Hastings
3.  William Bentinck
4.  George Curzon

Question Number : 32 Question Id : 186075235 Question Type : MCQ Option Shuffling : No Is Question Mandatory : No Calculator : None Response Time : N.A Think Time : N.A Minimum Instruction Time : 0 Allowed Progression : Yes Number of Replay : 999 Play On Load : No Control Enable : Yes Time interval to replay(In Seconds) : 0 Allow Volume Control : No

Correct Marks : 1 Wrong Marks : 0.25

A Memorandum of Understanding on 'Cooperation in the Peaceful Uses of Outer Space' was signed between India and Bhutan in the year _____.

Options :




1.  2016
2.  2020
3.  2022
4.  2018

Question Number : 33 Question Id : 186075236 Question Type : MCQ Option Shuffling : No Is Question Mandatory : No Calculator : None Response Time : N.A Think Time : N.A Minimum Instruction Time : 0 Allowed Progression : Yes Number of Replay : 999 Play On Load : No Control Enable : Yes Time interval to replay(In Seconds) : 0 Allow Volume Control : No

Correct Marks : 1 Wrong Marks : 0.25

_____ occurs when a person is out of one job and is searching for another.

Options :

1.  Demand deficient unemployment
2.  Frictional unemployment
3.  Structural unemployment

4. ✖ Disguised unemployment

Question Number : 34 Question Id : 186075237 Question Type : MCQ Option Shuffling : No Is Question Mandatory : No Calculator : None Response Time : N.A Think Time : N.A Minimum Instruction Time : 0 Allowed Progression : Yes Number of Replay : 999 Play On Load : No Control Enable : Yes Time interval to replay(In Seconds) : 0 Allow Volume Control : No

Correct Marks : 1 Wrong Marks : 0.25

As per Section 8(2) of the Micro Finance Institutions (Development and Regulation) Act 2012, the Reserve Bank of India nominates _____ person/s having experience in the field of micro finance, to each State Micro Finance Council.

Options :

1. ✖ four
2. ✖ three
3. ✖ two
4. ✔ one

Question Number : 35 Question Id : 186075238 Question Type : MCQ Option Shuffling : No Is Question Mandatory : No Calculator : None Response Time : N.A Think Time : N.A Minimum Instruction Time : 0 Allowed Progression : Yes Number of Replay : 999 Play On Load : No Control Enable : Yes Time interval to replay(In Seconds) : 0 Allow Volume Control : No

Correct Marks : 1 Wrong Marks : 0.25

The National Backward Classes Finance and Development Corporation (NBCFDC) was incorporated in 1992, under the aegis of the _____.

Options :

1. ✖ Ministry of Finance
2. ✔ Ministry of Social Justice & Empowerment
3. ✖ Ministry of Commerce and Industry
4. ✖ Ministry of Micro, Small and Medium Enterprises

Question Number : 36 Question Id : 186075239 Question Type : MCQ Option Shuffling : No Is Question Mandatory : No Calculator : None Response Time : N.A Think Time : N.A Minimum Instruction Time : 0 Allowed Progression : Yes Number of Replay : 999 Play On Load : No Control Enable : Yes Time interval to replay(In Seconds) : 0 Allow Volume Control : No

Correct Marks : 1 Wrong Marks : 0.25

According to a report released by the United Nations Development Programme (UNDP), with an HDI value of _____, India ranked 132 out of 191 countries in the 2021 Human Development Index.

Options :

1. ✔ 0.633

2. ✖ 0.645
3. ✖ 0.654
4. ✖ 0.667

Question Number : 37 Question Id : 186075240 Question Type : MCQ Option Shuffling : No Is Question Mandatory : No Calculator : None Response Time : N.A Think Time : N.A Minimum Instruction Time : 0 Allowed Progression : Yes Number of Replay : 999 Play On Load : No Control Enable : Yes Time interval to replay(In Seconds) : 0 Allow Volume Control : No

Correct Marks : 1 Wrong Marks : 0.25

In India, teak is an important species of trees found in _____ Forests.

Options :

1. ✖ Tropical Evergreen
2. ✔ Tropical Deciduous
3. ✖ Montane
4. ✖ Mangrove

Question Number : 38 Question Id : 186075241 Question Type : MCQ Option Shuffling : No Is Question Mandatory : No Calculator : None Response Time : N.A Think Time : N.A Minimum Instruction Time : 0 Allowed Progression : Yes Number of Replay : 999 Play On Load : No Control Enable : Yes Time interval to replay(In Seconds) : 0 Allow Volume Control : No

Correct Marks : 1 Wrong Marks : 0.25

Rivers originating from the Amarkantak Range present a good example of the ' _____ ' drainage pattern.

Options :

1. ✖ centripetal
2. ✖ dendritic
3. ✔ radial
4. ✖ trellis

Question Number : 39 Question Id : 186075242 Question Type : MCQ Option Shuffling : No Is Question Mandatory : No Calculator : None Response Time : N.A Think Time : N.A Minimum Instruction Time : 0 Allowed Progression : Yes Number of Replay : 999 Play On Load : No Control Enable : Yes Time interval to replay(In Seconds) : 0 Allow Volume Control : No

Correct Marks : 1 Wrong Marks : 0.25

Which of the following statements related to climate and seasons in India is INCORRECT?

Options :

1. ✖ The area lying south of the Tropic of Cancer experiences high temperatures throughout the year with small daily and annual range.

2. ✖ The area lying north of the Tropic of Cancer experiences extreme climate with high daily and annual range of temperature.
3. ✔ The Himalayas trap monsoon winds, forcing them to shed their moisture outside the Indian subcontinent.
4. ✖ The seasonal contrasts in weather at Delhi is extreme whereas Mumbai does not experience extremes of temperature.

Question Number : 40 Question Id : 186075243 Question Type : MCQ Option Shuffling : No Is Question Mandatory : No Calculator : None Response Time : N.A Think Time : N.A Minimum Instruction Time : 0 Allowed Progression : Yes Number of Replay : 999 Play On Load : No Control Enable : Yes Time interval to replay(In Seconds) : 0 Allow Volume Control : No

Correct Marks : 1 Wrong Marks : 0.25

For the purpose of census 2011, a person aged _____, is treated as literate.

Options :

1. ✖ five and above, who can both read and write with understanding in any language
2. ✔ seven and above, who can both read and write with understanding in any language
3. ✖ five and above, who can both read and write with understanding in any language AND read in Hindi
4. ✖ seven and above, who can both read and write with understanding in any language AND read in Hindi

Question Number : 41 Question Id : 186075244 Question Type : MCQ Option Shuffling : No Is Question Mandatory : No Calculator : None Response Time : N.A Think Time : N.A Minimum Instruction Time : 0 Allowed Progression : Yes Number of Replay : 999 Play On Load : No Control Enable : Yes Time interval to replay(In Seconds) : 0 Allow Volume Control : No

Correct Marks : 1 Wrong Marks : 0.25

As per data on Population by Religious Communities of Census 2011 released by the Registrar General and Census Commissioner (India), Jains constitute _____ of the total population of the country.

Options :

1. ✔ 0.4 percent
2. ✖ 1.7 percent
3. ✖ 8.9 percent
4. ✖ 14.2 percent

Question Number : 42 Question Id : 186075245 Question Type : MCQ Option Shuffling : No Is Question Mandatory : No Calculator : None Response Time : N.A Think Time : N.A Minimum Instruction Time : 0 Allowed Progression : Yes Number of Replay : 999 Play On Load : No Control Enable : Yes Time interval to replay(In Seconds) : 0 Allow Volume Control : No

Correct Marks : 1 Wrong Marks : 0.25

The Tezu Airport is located in the state of _____.

Options :

1. ✖ Manipur
2. ✖ Nagaland
3. ✖ Assam
4. ✔ Arunachal Pradesh

Question Number : 43 Question Id : 186075246 Question Type : MCQ Option Shuffling : No Is Question Mandatory : No Calculator : None Response Time : N.A Think Time : N.A Minimum Instruction Time : 0 Allowed Progression : Yes Number of Replay : 999 Play On Load : No Control Enable : Yes Time interval to replay(In Seconds) : 0 Allow Volume Control : No

Correct Marks : 1 Wrong Marks : 0.25

Who is the ex-officio chairperson of the National Judicial Appointments Commission of India?

Options :

1. ✖ The Prime Minister of India
2. ✔ The Chief Justice of India
3. ✖ The Vice President of India
4. ✖ The President of India

Question Number : 44 Question Id : 186075247 Question Type : MCQ Option Shuffling : No Is Question Mandatory : No Calculator : None Response Time : N.A Think Time : N.A Minimum Instruction Time : 0 Allowed Progression : Yes Number of Replay : 999 Play On Load : No Control Enable : Yes Time interval to replay(In Seconds) : 0 Allow Volume Control : No

Correct Marks : 1 Wrong Marks : 0.25

Article 63 of the Constitution of India states that ‘_____’.

Options :

1. ✔ There shall be a Vice-President of India
2. ✖ There shall be a Parliament for the Union which shall consist of the President and two Houses
3. ✖ There shall be a High Court for each State.
4. ✖ There shall be a Comptroller and Auditor-General of India who shall be appointed by the President

Question Number : 45 Question Id : 186075248 Question Type : MCQ Option Shuffling : No Is Question Mandatory : No Calculator : None Response Time : N.A Think Time : N.A Minimum Instruction Time : 0 Allowed Progression : Yes Number of Replay : 999 Play On Load : No Control Enable : Yes Time interval to replay(In Seconds) : 0 Allow Volume Control : No

Correct Marks : 1 Wrong Marks : 0.25

_____ of the Constitution of India provides for the formation of a District Planning Committee in every State.

Options :

1. ✖ Article 243ZA
2. ✖ Article 243ZN
3. ✔ Article 243ZD
4. ✖ Article 243ZJ

Question Number : 46 Question Id : 186075249 Question Type : MCQ Option Shuffling : No Is Question Mandatory : No Calculator : None Response Time : N.A Think Time : N.A Minimum Instruction Time : 0 Allowed Progression : Yes Number of Replay : 999 Play On Load : No Control Enable : Yes Time interval to replay(In Seconds) : 0 Allow Volume Control : No

Correct Marks : 1 Wrong Marks : 0.25

Which of the following Indian states is closest to the third-highest mountain peak in the world?

Options :

1. ✖ Mizoram
2. ✖ Manipur
3. ✖ Nagaland
4. ✔ Sikkim

Question Number : 47 Question Id : 186075250 Question Type : MCQ Option Shuffling : No Is Question Mandatory : No Calculator : None Response Time : N.A Think Time : N.A Minimum Instruction Time : 0 Allowed Progression : Yes Number of Replay : 999 Play On Load : No Control Enable : Yes Time interval to replay(In Seconds) : 0 Allow Volume Control : No

Correct Marks : 1 Wrong Marks : 0.25

The Kharsang Oil Field (KOF) located in the state of _____.

Options :

1. ✖ Andhra Pradesh
2. ✔ Arunachal Pradesh
3. ✖ Madhya Pradesh
4. ✖ Uttar Pradesh

Question Number : 48 Question Id : 186075251 Question Type : MCQ Option Shuffling : No Is Question Mandatory : No Calculator : None Response Time : N.A Think Time : N.A Minimum Instruction Time : 0 Allowed Progression : Yes Number of Replay : 999 Play On Load : No Control Enable : Yes Time interval to replay(In Seconds) : 0 Allow Volume Control : No

Correct Marks : 1 Wrong Marks : 0.25

With which of the following states is the Mamita (Maimata) dance chiefly associated?

Options :

1. ✖ Arunachal Pradesh
2. ✖ Manipur
3. ✔ Tripura
4. ✖ Nagaland

Question Number : 49 Question Id : 186075252 Question Type : MCQ Option Shuffling : No Is Question Mandatory : No Calculator : None Response Time : N.A Think Time : N.A Minimum Instruction Time : 0 Allowed Progression : Yes Number of Replay : 999 Play On Load : No Control Enable : Yes Time interval to replay(In Seconds) : 0 Allow Volume Control : No

Correct Marks : 1 Wrong Marks : 0.25

Which of the following statements is CORRECT?

Options :

1. ✖ Odissi dance was introduced by a Vaishnava saint and reformer of Assam.
2. ✔ Lai Haraoba is the earliest form of dance which forms the basis of all stylised dances in Manipur.
3. ✖ 'Gotipuas' are associated with Sattriya dance.
4. ✖ Manipuri dance is known to be 'Ekaharya', where one dancer takes on many roles in a single performance.

Question Number : 50 Question Id : 186075253 Question Type : MCQ Option Shuffling : No Is Question Mandatory : No Calculator : None Response Time : N.A Think Time : N.A Minimum Instruction Time : 0 Allowed Progression : Yes Number of Replay : 999 Play On Load : No Control Enable : Yes Time interval to replay(In Seconds) : 0 Allow Volume Control : No

Correct Marks : 1 Wrong Marks : 0.25

_____ is a kind of Manipuri folk dance, where both men and women hold hands together to sing and dance in a circle.

Options :

1. ✔ Thabal Chongba
2. ✖ Jagoi
3. ✖ Tandan Pheichak
4. ✖ Kartal Cholom

Quantitative Aptitude and Data Interpretation

Section Id :

18607527

Section Number :

3

Section type :	Online
Mandatory or Optional :	Mandatory
Number of Questions :	25
Number of Questions to be attempted :	25
Section Marks :	25
Enable Mark as Answered Mark for Review and Clear Response :	Yes
Maximum Instruction Time :	0
Sub-Section Number :	1
Sub-Section Id :	18607534
Question Shuffling Allowed :	Yes
Is Section Default? :	null

Question Number : 51 Question Id : 186075254 Question Type : MCQ Option Shuffling : No Is Question Mandatory : No Calculator :
None Response Time : N.A Think Time : N.A Minimum Instruction Time : 0 Allowed Progression : Yes Number of Replay : 999 Play On
Load : No Control Enable : Yes Time interval to replay(In Seconds) : 0 Allow Volume Control : No
Correct Marks : 1 Wrong Marks : 0.25

Find the value of the following.

$$\sqrt{23 + 3\sqrt{5}} + \sqrt{23 - 3\sqrt{5}}$$

Options :

1. ✖ 90
2. ✖ 70
3. ✖ $4\sqrt{5}$
4. ✔ $3\sqrt{10}$

Question Number : 52 Question Id : 186075255 Question Type : MCQ Option Shuffling : No Is Question Mandatory : No Calculator :
None Response Time : N.A Think Time : N.A Minimum Instruction Time : 0 Allowed Progression : Yes Number of Replay : 999 Play On
Load : No Control Enable : Yes Time interval to replay(In Seconds) : 0 Allow Volume Control : No

Correct Marks : 1 Wrong Marks : 0.25

The difference between two integers is 1752. When the larger integer is divided by the smaller integer, the result is $1\frac{438}{899}$. Find the HCF of the integers.

Options :

1. ✖ 1

2. ✖ 2

3. ✖ 3

4. ✔ 4

Question Number : 53 Question Id : 186075256 Question Type : MCQ Option Shuffling : No Is Question Mandatory : No Calculator : None Response Time : N.A Think Time : N.A Minimum Instruction Time : 0 Allowed Progression : Yes Number of Replay : 999 Play On Load : No Control Enable : Yes Time interval to replay(In Seconds) : 0 Allow Volume Control : No

Correct Marks : 1 Wrong Marks : 0.25

In March 2022, in a museum, there were an average of 125 visitors on Saturdays, an average of 115 visitors on Sundays, and an average of 85 visitors on other days. If 1st of March was a Sunday, find the average visitors per day for the month.

Options :

1. ✖ 92

2. ✔ 95

3. ✖ 98

4. ✖ 101

Question Number : 54 Question Id : 186075257 Question Type : MCQ Option Shuffling : No Is Question Mandatory : No Calculator : None Response Time : N.A Think Time : N.A Minimum Instruction Time : 0 Allowed Progression : Yes Number of Replay : 999 Play On Load : No Control Enable : Yes Time interval to replay(In Seconds) : 0 Allow Volume Control : No Correct Marks : 1 Wrong Marks : 0.25

Neeraj sold 2 plots of land that were purchased at a total cost of ₹ 90 lakhs. He earned a profit of 22% on plot-1 and a profit of 15% on plot-2, giving him a total profit of 19.2%. Find the ratio of the cost of plot-1 to plot -2.

Options :

1. ✖ 1 : 2
2. ✖ 4 : 3
3. ✖ 2 : 5
4. ✔ 3 : 2

Question Number : 55 Question Id : 186075258 Question Type : MCQ Option Shuffling : No Is Question Mandatory : No Calculator : None Response Time : N.A Think Time : N.A Minimum Instruction Time : 0 Allowed Progression : Yes Number of Replay : 999 Play On Load : No Control Enable : Yes Time interval to replay(In Seconds) : 0 Allow Volume Control : No Correct Marks : 1 Wrong Marks : 0.25

The income of Arun is 28% more than that of Varun, and their savings are in the ratio of 3 : 2. If each of them spent ₹ 5,500, find the sum of the incomes (in ₹) of Arun and Varun.

Options :

1. ✖ 25,200
2. ✖ 26,300
3. ✔ 28,500
4. ✖ 30,000

Question Number : 56 Question Id : 186075259 Question Type : MCQ Option Shuffling : No Is Question Mandatory : No Calculator : None Response Time : N.A Think Time : N.A Minimum Instruction Time : 0 Allowed Progression : Yes Number of Replay : 999 Play On Load : No Control Enable : Yes Time interval to replay(In Seconds) : 0 Allow Volume Control : No

Correct Marks : 1 Wrong Marks : 0.25

In a class of boys and girls, there are x students. On a certain day, 4 boys and 2 girls were absent, so the ratio of boys to girls became 6 : 5, and when 1 boy and 1 girl were absent, the ratio became 9 : 7. Find x.

Options :

- 1. ✓ 50
- 2. ✗ 56
- 3. ✗ 62
- 4. ✗ 68

Question Number : 57 Question Id : 186075260 Question Type : MCQ Option Shuffling : No Is Question Mandatory : No Calculator : None Response Time : N.A Think Time : N.A Minimum Instruction Time : 0 Allowed Progression : Yes Number of Replay : 999 Play On Load : No Control Enable : Yes Time interval to replay(In Seconds) : 0 Allow Volume Control : No

Correct Marks : 1 Wrong Marks : 0.25

The simple interest on a sum of money is $\frac{9}{50}$ of the principal and the time period (in years) is 2 times of the rate of interest per annum. What is the rate per cent?

Options :

- 1. ✗ 2%
- 2. ✗ 2.5%
- 3. ✓ 3%
- 4. ✗ 3.5%

Question Number : 58 Question Id : 186075261 Question Type : MCQ Option Shuffling : No Is Question Mandatory : No Calculator : None Response Time : N.A Think Time : N.A Minimum Instruction Time : 0 Allowed Progression : Yes Number of Replay : 999 Play On Load : No Control Enable : Yes Time interval to replay(In Seconds) : 0 Allow Volume Control : No

Correct Marks : 1 Wrong Marks : 0.25

A mobile phone is available for ₹ 16,000 or ₹ 2,500 down payment followed by 4 equal monthly instalments. If the interest charged is 20% p.a. simple interest, find the instalment amount (in ₹). (Rounded off to the nearest tens)

Options :

1. ✓ 3,510
2. ✗ 3,720
3. ✗ 4,020
4. ✗ 4,270

Question Number : 59 Question Id : 186075262 Question Type : MCQ Option Shuffling : No Is Question Mandatory : No Calculator : None Response Time : N.A Think Time : N.A Minimum Instruction Time : 0 Allowed Progression : Yes Number of Replay : 999 Play On Load : No Control Enable : Yes Time interval to replay(In Seconds) : 0 Allow Volume Control : No

Correct Marks : 1 Wrong Marks : 0.25

A train can travel 50% faster than a bus. Both start from point 'X' at the same time and reach point 'Y', 210 km away from 'X'. On the way, the train lost 20 minutes to stoppage and reached half an hour earlier than the bus. The speed of the bus (in km/h) is:

Options :

1. ✗ 75
2. ✓ 84

3. ✖ 96

4. ✖ 124

Question Number : 60 Question Id : 186075263 Question Type : MCQ Option Shuffling : No Is Question Mandatory : No Calculator : None Response Time : N.A Think Time : N.A Minimum Instruction Time : 0 Allowed Progression : Yes Number of Replay : 999 Play On Load : No Control Enable : Yes Time interval to replay(In Seconds) : 0 Allow Volume Control : No

Correct Marks : 1 Wrong Marks : 0.25

X and Y can finish a certain work in 24 and 30 days, respectively. They worked together for 6 days, after which X left.

Z joined Y and they completed the balance work in $7\frac{1}{2}$ days. In how many days will Z complete 80% of the work alone?

Options :

1. ✖ 18

2. ✔ 20

3. ✖ 24

4. ✖ 25

Question Number : 61 Question Id : 186075264 Question Type : MCQ Option Shuffling : No Is Question Mandatory : No Calculator : None Response Time : N.A Think Time : N.A Minimum Instruction Time : 0 Allowed Progression : Yes Number of Replay : 999 Play On Load : No Control Enable : Yes Time interval to replay(In Seconds) : 0 Allow Volume Control : No

Correct Marks : 1 Wrong Marks : 0.25

Pipes P and Q can fill a tank in 40 minutes and 50 minutes, respectively, while Pipes R and S can drain the tank in 1 hour 20 minutes and 1 hour 40 minutes, respectively. If P and R are opened together for 15 minutes and closed and Q and S are opened for 20 minutes, what part of the tank is full at the end of 35 minutes.

Options :

1. ✖ $\frac{15}{52}$

2. ✓ $\frac{31}{80}$

3. ✗ $\frac{25}{63}$

4. ✗ $\frac{74}{95}$

Question Number : 62 Question Id : 186075265 Question Type : MCQ Option Shuffling : No Is Question Mandatory : No Calculator : None Response Time : N.A Think Time : N.A Minimum Instruction Time : 0 Allowed Progression : Yes Number of Replay : 999 Play On Load : No Control Enable : Yes Time interval to replay(In Seconds) : 0 Allow Volume Control : No Correct Marks : 1 Wrong Marks : 0.25

If the radius of a sphere is increased by 8%, by what percentage will the surface area increase?

Options :

1. ✗ 16%

2. ✗ 16.4%

3. ✓ 16.64%

4. ✗ 64%

Question Number : 63 Question Id : 186075266 Question Type : MCQ Option Shuffling : No Is Question Mandatory : No Calculator : None Response Time : N.A Think Time : N.A Minimum Instruction Time : 0 Allowed Progression : Yes Number of Replay : 999 Play On Load : No Control Enable : Yes Time interval to replay(In Seconds) : 0 Allow Volume Control : No Correct Marks : 1 Wrong Marks : 0.25

There is a cone of height 14 m and radius 3 m. The said cone is filled with water at the rate of 4 cubic metres every 30 seconds. How long (in minutes and seconds) will it take to fill the cone?

Options :

1. ✓ 16 minutes 30 seconds
2. ✗ 16 minutes 50 seconds
3. ✗ 17 minutes 25 seconds
4. ✗ 17 minutes 54 seconds

Question Number : 64 Question Id : 186075267 Question Type : MCQ Option Shuffling : No Is Question Mandatory : No Calculator : None Response Time : N.A Think Time : N.A Minimum Instruction Time : 0 Allowed Progression : Yes Number of Replay : 999 Play On Load : No Control Enable : Yes Time interval to replay(In Seconds) : 0 Allow Volume Control : No

Correct Marks : 1 Wrong Marks : 0.25

A cylindrical juice can of radius 3.5 cm and height 18 cm are to be packed in a box of $l = 60$ cm, $w = 45$ cm and $h = 38$ cm. How many cans can be packed in the box?

Options :

1. ✗ 24 cans
2. ✗ 48 cans
3. ✗ 72 cans
4. ✓ 96 cans

Question Number : 65 Question Id : 186075268 Question Type : MCQ Option Shuffling : No Is Question Mandatory : No Calculator : None Response Time : N.A Think Time : N.A Minimum Instruction Time : 0 Allowed Progression : Yes Number of Replay : 999 Play On Load : No Control Enable : Yes Time interval to replay(In Seconds) : 0 Allow Volume Control : No

Correct Marks : 1 Wrong Marks : 0.25

The areas of three adjacent faces of a solid metallic cuboid are 200 cm^2 , 300 cm^2 and 384 cm^2 . Three such cuboids are melted and recast into 4 cubes of the same size. What is the approximate lateral surface area (in cm^2) of the cube?

Options :

- 1. ✖ 962
- 2. ✔ 940
- 3. ✖ 923
- 4. ✖ 905

Question Number : 66 Question Id : 186075269 Question Type : MCQ Option Shuffling : No Is Question Mandatory : No Calculator : None Response Time : N.A Think Time : N.A Minimum Instruction Time : 0 Allowed Progression : Yes Number of Replay : 999 Play On Load : No Control Enable : Yes Time interval to replay(In Seconds) : 0 Allow Volume Control : No Correct Marks : 1 Wrong Marks : 0.25

A number when successively divided by 3, 5 and 4 leaves remainders 1, 2 and 3, respectively, and quotient 40. The number is:

Options :

- 1. ✖ 2293
- 2. ✖ 2377
- 3. ✔ 2452
- 4. ✖ 2503

Question Number : 67 Question Id : 186075270 Question Type : MCQ Option Shuffling : No Is Question Mandatory : No Calculator : None Response Time : N.A Think Time : N.A Minimum Instruction Time : 0 Allowed Progression : Yes Number of Replay : 999 Play On Load : No Control Enable : Yes Time interval to replay(In Seconds) : 0 Allow Volume Control : No Correct Marks : 1 Wrong Marks : 0.25

The average of 6 consecutive odd numbers is 42. Find the ratio of the second to the fifth odd number.

Options :

1. ✖ 9 : 11

2. ✖ 11 : 13

3. ✔ 13 : 15

4. ✖ 15 : 17

Question Number : 68 Question Id : 186075271 Question Type : MCQ Option Shuffling : No Is Question Mandatory : No Calculator : None Response Time : N.A Think Time : N.A Minimum Instruction Time : 0 Allowed Progression : Yes Number of Replay : 999 Play On Load : No Control Enable : Yes Time interval to replay(In Seconds) : 0 Allow Volume Control : No

Correct Marks : 1 Wrong Marks : 0.25

Two cars A and B set out to cover a distance of 90 km. The speed of car A is 72 km/h and that of car B is 84 km/h for the first half hour, and for the balance distance, the speed of car A increases by 25% and the speed of car B reduces to 64 km/h. Find the difference between the average speeds (in km/h) of the cars.

Options :

1. ✔ 9.81

2. ✖ 9.47

3. ✖ 8.35

4. ✖ 8.12

Question Number : 69 Question Id : 186075272 Question Type : MCQ Option Shuffling : No Is Question Mandatory : No Calculator : None Response Time : N.A Think Time : N.A Minimum Instruction Time : 0 Allowed Progression : Yes Number of Replay : 999 Play On Load : No Control Enable : Yes Time interval to replay(In Seconds) : 0 Allow Volume Control : No

Correct Marks : 1 Wrong Marks : 0.25

An article is sold at a certain price 'x'. If it is sold at $\frac{2}{3}$ the price, the shopkeeper makes a loss of $11\frac{1}{9}\%$. Find the profit percentage on the original selling price.

Options :

- 1. ✖ $14\frac{1}{9}\%$
- 2. ✖ $23\frac{4}{7}\%$
- 3. ✔ $33\frac{1}{3}\%$
- 4. ✖ $41\frac{1}{5}\%$

Question Number : 70 Question Id : 186075273 Question Type : MCQ Option Shuffling : No Is Question Mandatory : No Calculator : None Response Time : N.A Think Time : N.A Minimum Instruction Time : 0 Allowed Progression : Yes Number of Replay : 999 Play On Load : No Control Enable : Yes Time interval to replay(In Seconds) : 0 Allow Volume Control : No

Correct Marks : 1 Wrong Marks : 0.25

A shopkeeper offers the following schemes:

- 1. Two successive discounts of 10% and 12%
- 2. Buy 3, get 5 free
- 3. Buy 6, get 3 free
- 4. Flat 18% discount

Which scheme gives the maximum discount?

Options :

1. ✖ Scheme 1

2. ✔ Scheme 2

3. ✖ Scheme 3

4. ✖ Scheme 4

Question Number : 71 Question Id : 186075274 Question Type : MCQ Option Shuffling : No Is Question Mandatory : No Calculator : None Response Time : N.A Think Time : N.A Minimum Instruction Time : 0 Allowed Progression : Yes Number of Replay : 999 Play On Load : No Control Enable : Yes Time interval to replay(In Seconds) : 0 Allow Volume Control : No

Correct Marks : 1 Wrong Marks : 0.25

The salaries of X, Y and Z are in the ratio of 2 : 3 : 4. If they receive increments of 24%, 20% and 15% in their salaries, what will the ratio of their new salaries be?

Options :

1. ✔ 62 : 90 : 115

2. ✖ 55 : 63 : 107

3. ✖ 50 : 74 : 101

4. ✖ 47 : 83 : 129

Question Number : 72 Question Id : 186075275 Question Type : MCQ Option Shuffling : No Is Question Mandatory : No Calculator : None Response Time : N.A Think Time : N.A Minimum Instruction Time : 0 Allowed Progression : Yes Number of Replay : 999 Play On Load : No Control Enable : Yes Time interval to replay(In Seconds) : 0 Allow Volume Control : No

Correct Marks : 1 Wrong Marks : 0.25

A TV costing ₹ 21,650 was purchased by paying a down payment of ₹ 5,400 and balance of ₹ 17,225 after 6 months as final settlement. Find the rate of simple interest paid.

Options :

- 1. ✖ 15%
- 2. ✔ 12%
- 3. ✖ 10%
- 4. ✖ 8%

Question Number : 73 Question Id : 186075276 Question Type : MCQ Option Shuffling : No Is Question Mandatory : No Calculator : None Response Time : N.A Think Time : N.A Minimum Instruction Time : 0 Allowed Progression : Yes Number of Replay : 999 Play On Load : No Control Enable : Yes Time interval to replay(In Seconds) : 0 Allow Volume Control : No

Correct Marks : 1 Wrong Marks : 0.25

A man drives his car at the speed of 30 km/h for first one-third distance, 40 km/h for the second one-third distance, and 50 km/h for the balance distance. He comes back by the same route by driving at a speed of 45 km/h for the first half of the distance and at 60 km/h for the balance distance. Find the average speed (in km/h) for the whole journey.

Options :

- 1. ✖ 46.25
- 2. ✖ 44.86
- 3. ✔ 43.90
- 4. ✖ 41.80

Question Number : 74 Question Id : 186075277 Question Type : MCQ Option Shuffling : No Is Question Mandatory : No Calculator : None Response Time : N.A Think Time : N.A Minimum Instruction Time : 0 Allowed Progression : Yes Number of Replay : 999 Play On Load : No Control Enable : Yes Time interval to replay(In Seconds) : 0 Allow Volume Control : No

Correct Marks : 1 Wrong Marks : 0.25

A can finish a work in 21 days and B can finish the same work in 28 days. If they work on alternate days starting with B, in how many days will they complete the work?

Options :

1. ✓ 24

2. ✗ 18

3. ✗ 12

4. ✗ 9

Question Number : 75 Question Id : 186075278 Question Type : MCQ Option Shuffling : No Is Question Mandatory : No Calculator : None Response Time : N.A Think Time : N.A Minimum Instruction Time : 0 Allowed Progression : Yes Number of Replay : 999 Play On Load : No Control Enable : Yes Time interval to replay(In Seconds) : 0 Allow Volume Control : No

Correct Marks : 1 Wrong Marks : 0.25

A cistern can be filled separately by two taps A and B in 24 minutes and 36 minutes, respectively. Tap C at the bottom can empty the full cistern in 40 minutes. If all the taps are kept open for 5 minutes and tap C is closed and only taps A and B are left open, what is the total time (in minutes and seconds) taken for the cistern to fill up?

Options :

1. ✓ 16 minutes 12 seconds

2. ✗ 15 minutes 24 seconds

3. ✗ 13 minutes 40 seconds

4. ✗ 11 minutes 20 seconds

Reasoning Ability

Section Id :	18607528
Section Number :	4
Section type :	Online
Mandatory or Optional :	Mandatory
Number of Questions :	25
Number of Questions to be attempted :	25
Section Marks :	25
Enable Mark as Answered Mark for Review and Clear Response :	Yes
Maximum Instruction Time :	0
Sub-Section Number :	1
Sub-Section Id :	18607535
Question Shuffling Allowed :	Yes
Is Section Default? :	null

Question Number : 76 Question Id : 186075279 Question Type : MCQ Option Shuffling : No Is Question Mandatory : No Calculator : None Response Time : N.A Think Time : N.A Minimum Instruction Time : 0 Allowed Progression : Yes Number of Replay : 999 Play On Load : No Control Enable : Yes Time interval to replay(In Seconds) : 0 Allow Volume Control : No Correct Marks : 1 Wrong Marks : 0.25

Eight students K, L, M, N, P, Q, R and S are sitting equidistant around a round table facing towards the centre. L is the immediate neighbour of between M and R. N is the immediate neighbour of K and P. S is the immediate neighbour of P and Q. K is sitting second to the right of L. Q is the immediate neighbour of M and S. Who is sitting second to the right of P?

Options :

1. ✖ M

2. ✖ L

3. ✖ K

4. ✔ Q

Question Number : 77 Question Id : 186075280 Question Type : MCQ Option Shuffling : No Is Question Mandatory : No Calculator : None Response Time : N.A Think Time : N.A Minimum Instruction Time : 0 Allowed Progression : Yes Number of Replay : 999 Play On Load : No Control Enable : Yes Time interval to replay(In Seconds) : 0 Allow Volume Control : No

Correct Marks : 1 Wrong Marks : 0.25

Seven friends P, N, Q, R, T, U and Z are living in the same building on different floors, but not necessarily in the same order. Floors are numbered 1 to 7. The lowermost floor is numbered 1 and the topmost floor is numbered 7. Z is not living on an even numbered floor. P is living just below Z. Only Q is living between T and R. There are two persons living between Q and Z. Only N is living between U and Z. R is not living on the 3rd floor. Who is living on the middle floor?

Options :

1. ✖ U

2. ✖ N

3. ✔ P

4. ✖ Q

Question Number : 78 Question Id : 186075281 Question Type : MCQ Option Shuffling : No Is Question Mandatory : No Calculator : None Response Time : N.A Think Time : N.A Minimum Instruction Time : 0 Allowed Progression : Yes Number of Replay : 999 Play On Load : No Control Enable : Yes Time interval to replay(In Seconds) : 0 Allow Volume Control : No

Correct Marks : 1 Wrong Marks : 0.25

Maya and Mahira are ranked 27th and 41st, respectively, from the left end of a row of 60 students. What will be their respective ranks from the right end?

Options :

1. ✖ 20th and 35th

2. ✔ 34th and 20th

3. ✖ 33rd and 19th

4. ✖ 19th and 33rd

Question Number : 79 Question Id : 186075282 Question Type : MCQ Option Shuffling : No Is Question Mandatory : No Calculator : None Response Time : N.A Think Time : N.A Minimum Instruction Time : 0 Allowed Progression : Yes Number of Replay : 999 Play On Load : No Control Enable : Yes Time interval to replay(In Seconds) : 0 Allow Volume Control : No

Correct Marks : 1 Wrong Marks : 0.25

Read the given statements and conclusions carefully. Assuming that the information given in the statements is true, even if it appears to be at variance with commonly known facts, decide which of the given conclusions logically follow(s) from the statements.

Statements:

- A. All cars are guns.
- B. All guns are smokes.
- C. All smokes are clouds.

Conclusions:

- I. Some clouds are smokes.
- II. Some guns are cars.
- III. Some cars are smokes.

Options :

- 1. ✖ Only conclusion III follows
- 2. ✖ Only conclusions I and III follow
- 3. ✖ Only conclusions II and III follow
- 4. ✔ All the conclusions follow

Question Number : 80 Question Id : 186075283 Question Type : MCQ Option Shuffling : No Is Question Mandatory : No Calculator : None Response Time : N.A Think Time : N.A Minimum Instruction Time : 0 Allowed Progression : Yes Number of Replay : 999 Play On Load : No Control Enable : Yes Time interval to replay(In Seconds) : 0 Allow Volume Control : No
Correct Marks : 1 Wrong Marks : 0.25

Read the given statements and conclusions carefully. Assuming that the information given in the statements is true, even if it appears to be at variance with commonly known facts, decide which of the given conclusions logically follow(s) from the statements.

Statements:

- A. All chairs are tables.
- B. All pencils are tables.
- C. All tables are keys.

Conclusions:

- I. Some chairs are pencils.
- II. No chair is a pencil.
- III. No key is a chair.

Options :

- 1. ✓ Either conclusion I or II follows
- 2. ✗ Either conclusion I or III follows
- 3. ✗ Only conclusions II and III follow
- 4. ✗ None of the conclusions follow

Question Number : 81 Question Id : 186075284 Question Type : MCQ Option Shuffling : No Is Question Mandatory : No Calculator : None Response Time : N.A Think Time : N.A Minimum Instruction Time : 0 Allowed Progression : Yes Number of Replay : 999 Play On Load : No Control Enable : Yes Time interval to replay(In Seconds) : 0 Allow Volume Control : No
Correct Marks : 1 Wrong Marks : 0.25

Ram is younger than Sohan and elder than Maya, while Maya is younger than Dev. Dev is elder than Shyam. Shyam is elder than Sohan. Dev is elder than Sohan and younger than Manu. Who is the second youngest among all?

Options :





1.  Ram
2.  Manu
3.  Maya
4.  Sohan

Question Number : 82 Question Id : 186075285 Question Type : MCQ Option Shuffling : No Is Question Mandatory : No Calculator : None Response Time : N.A Think Time : N.A Minimum Instruction Time : 0 Allowed Progression : Yes Number of Replay : 999 Play On Load : No Control Enable : Yes Time interval to replay(In Seconds) : 0 Allow Volume Control : No Correct Marks : 1 Wrong Marks : 0.25

If we delete all numbers from the following sequence, which will be the seventh letter from the right of the letter which will be at the sixth place from the left end in the sequence?

AB2S3G6H5T73E7DF58H4R5TJ3YU65254 332TG6DSH3DY56F6GH54

Options :

1.  D
2.  G
3.  J
4.  Y

Question Number : 83 Question Id : 186075286 Question Type : MCQ Option Shuffling : No Is Question Mandatory : No Calculator : None Response Time : N.A Think Time : N.A Minimum Instruction Time : 0 Allowed Progression : Yes Number of Replay : 999 Play On Load : No Control Enable : Yes Time interval to replay(In Seconds) : 0 Allow Volume Control : No Correct Marks : 1 Wrong Marks : 0.25

When all the digits in each of the given numbers are arranged in ascending order, which number becomes the second highest?

34285, 58391, 54386, 43716, 64935

Options :

1. ✖ 58391
2. ✔ 54386
3. ✖ 64935
4. ✖ 34285

Question Number : 84 Question Id : 186075287 Question Type : MCQ Option Shuffling : No Is Question Mandatory : No Calculator : None Response Time : N.A Think Time : N.A Minimum Instruction Time : 0 Allowed Progression : Yes Number of Replay : 999 Play On Load : No Control Enable : Yes Time interval to replay(In Seconds) : 0 Allow Volume Control : No Correct Marks : 1 Wrong Marks : 0.25

In a certain code language, 'SOLDIER' is written as '207116141721'. How will 'STAMINA' be written in that language?

Options :

1. ✔ 316111532221
2. ✖ 316111532021
3. ✖ 316111332221
4. ✖ 314111532221

Question Number : 85 Question Id : 186075288 Question Type : MCQ Option Shuffling : No Is Question Mandatory : No Calculator : None Response Time : N.A Think Time : N.A Minimum Instruction Time : 0 Allowed Progression : Yes Number of Replay : 999 Play On

Load : No Control Enable : Yes Time interval to replay(In Seconds) : 0 Allow Volume Control : No

Correct Marks : 1 Wrong Marks : 0.25

Vinci is facing east. He walks 135 metres in the same direction, then he turns 90° in the anticlockwise direction, and then 45° in the same direction. He again takes two turns of 135° and 315° in the clockwise direction. In which direction is he facing now?

Options :

1. ✖ East
2. ✖ North-West
3. ✔ North-East
4. ✖ North

Question Number : 86 Question Id : 186075289 Question Type : MCQ Option Shuffling : No Is Question Mandatory : No Calculator : None Response Time : N.A Think Time : N.A Minimum Instruction Time : 0 Allowed Progression : Yes Number of Replay : 999 Play On Load : No Control Enable : Yes Time interval to replay(In Seconds) : 0 Allow Volume Control : No

Correct Marks : 1 Wrong Marks : 0.25

T is the husband of X. Y is the son of Z. Z is the mother of S. S is the sister of X. How is Z's son related to T?

Options :

1. ✖ Son-in-law
2. ✔ Brother-in-law
3. ✖ Son
4. ✖ Cousin

Question Number : 87 Question Id : 186075290 Question Type : MCQ Option Shuffling : No Is Question Mandatory : No Calculator :

None Response Time : N.A Think Time : N.A Minimum Instruction Time : 0 Allowed Progression : Yes Number of Replay : 999 Play On Load : No Control Enable : Yes Time interval to replay(In Seconds) : 0 Allow Volume Control : No

Correct Marks : 1 Wrong Marks : 0.25

'A × B' means 'A is the father of B'.

'A + B' means 'A is the sister of B'.

'A ÷ B' means 'A is the mother of B'.

'A – B' means 'A is the daughter of B'.

How is M related to U in the expression 'M ÷ N × R – P + U'?

Options :

1. ✖ Daughter-in-law

2. ✖ Sister

3. ✖ Mother

4. ✔ Sister's mother-in-law

Question Number : 88 Question Id : 186075291 Question Type : MCQ Option Shuffling : No Is Question Mandatory : No Calculator : None Response Time : N.A Think Time : N.A Minimum Instruction Time : 0 Allowed Progression : Yes Number of Replay : 999 Play On Load : No Control Enable : Yes Time interval to replay(In Seconds) : 0 Allow Volume Control : No

Correct Marks : 1 Wrong Marks : 0.25

'A # B' means 'A is the mother of B'.

'A & B' means 'A is the son of B'.

'A @ B' means 'A is the wife of B'.

'A \$ B' means 'A is the father of B'.

Which of the following statements is true for the expression 'R & S # T @ U \$ V'?

Options :

1. ✖ S is the mother of V.

2. ✖ V is the son of T.
3. ✖ T is the father of V.
4. ✔ R is the uncle of V.

Question Number : 89 Question Id : 186075292 Question Type : MCQ Option Shuffling : No Is Question Mandatory : No Calculator : None Response Time : N.A Think Time : N.A Minimum Instruction Time : 0 Allowed Progression : Yes Number of Replay : 999 Play On Load : No Control Enable : Yes Time interval to replay(In Seconds) : 0 Allow Volume Control : No Correct Marks : 1 Wrong Marks : 0.25

Select the option that is related to the third word in the same way as the second word is related to the first word.

Peak : Everest :: Planet : ?

Options :

1. ✖ Moon
2. ✔ Jupiter
3. ✖ Satellite
4. ✖ Channel

Question Number : 90 Question Id : 186075293 Question Type : MCQ Option Shuffling : No Is Question Mandatory : No Calculator : None Response Time : N.A Think Time : N.A Minimum Instruction Time : 0 Allowed Progression : Yes Number of Replay : 999 Play On Load : No Control Enable : Yes Time interval to replay(In Seconds) : 0 Allow Volume Control : No Correct Marks : 1 Wrong Marks : 0.25

Select the option that is related to the third letter-cluster in the same way as the second letter-cluster is related to the first letter-cluster.

BDFH : SUWY :: GIKM : ?

Options :

1. ✖ NPRU

2. ✔ NPRT

3. ✖ NORT

4. ✖ NPJT

Question Number : 91 Question Id : 186075294 Question Type : MCQ Option Shuffling : No Is Question Mandatory : No Calculator : None Response Time : N.A Think Time : N.A Minimum Instruction Time : 0 Allowed Progression : Yes Number of Replay : 999 Play On Load : No Control Enable : Yes Time interval to replay(In Seconds) : 0 Allow Volume Control : No Correct Marks : 1 Wrong Marks : 0.25

Select the word triad from the options that is similar to the given set of words.

Kabul - Vienna - Beijing

Options :

1. ✖ Paris - Rome - Jordan

2. ✔ Doha - Moscow - Cairo

3. ✖ Kenya - Dili - Bern

4. ✖ Seoul - Romania - Lisbon

Question Number : 92 Question Id : 186075295 Question Type : MCQ Option Shuffling : No Is Question Mandatory : No Calculator : None Response Time : N.A Think Time : N.A Minimum Instruction Time : 0 Allowed Progression : Yes Number of Replay : 999 Play On Load : No Control Enable : Yes Time interval to replay(In Seconds) : 0 Allow Volume Control : No Correct Marks : 1 Wrong Marks : 0.25

Four letter-clusters have been given, out of which three are alike in some manner and one is different.
Select the letter-cluster that is different.

Options :

1. ✖ EJOT
2. ✖ FKPU
3. ✖ MRWB
4. ✔ SXCG

Question Number : 93 Question Id : 186075296 Question Type : MCQ Option Shuffling : No Is Question Mandatory : No Calculator : None Response Time : N.A Think Time : N.A Minimum Instruction Time : 0 Allowed Progression : Yes Number of Replay : 999 Play On Load : No Control Enable : Yes Time interval to replay(In Seconds) : 0 Allow Volume Control : No
Correct Marks : 1 Wrong Marks : 0.25

Four words have been given, out of which three are alike in some manner and one is different. Select the word that is different.

Options :

1. ✖ Entomology
2. ✖ Nephrology
3. ✖ Taxonomy
4. ✔ Artifacts

Question Number : 94 Question Id : 186075297 Question Type : MCQ Option Shuffling : No Is Question Mandatory : No Calculator : None Response Time : N.A Think Time : N.A Minimum Instruction Time : 0 Allowed Progression : Yes Number of Replay : 999 Play On Load : No Control Enable : Yes Time interval to replay(In Seconds) : 0 Allow Volume Control : No

Correct Marks : 1 Wrong Marks : 0.25

Four word-triads have been given, out of which three are alike in some manner and one is different.
Select the word- triad that is different.

Options :

1. ✖ Dog - Goat - Wolf
2. ✖ Snake - Turtle - Lizard
3. ✔ Whale - Dolphin - Beetle
4. ✖ Fly - Flea - Ant

Question Number : 95 Question Id : 186075298 Question Type : MCQ Option Shuffling : No Is Question Mandatory : No Calculator : None Response Time : N.A Think Time : N.A Minimum Instruction Time : 0 Allowed Progression : Yes Number of Replay : 999 Play On Load : No Control Enable : Yes Time interval to replay(In Seconds) : 0 Allow Volume Control : No

Correct Marks : 1 Wrong Marks : 0.25

A statement given followed by two courses of action numbered I and II. You have to assume everything in the statement to be true and on the basis of the information given in the statement, decide which of the suggested courses of action logically follow(s) for pursuing.

Statement: A large number of students are reported to be dropping schools after the lockdown.

Courses of Action:

- I. The authorities should meet students and parents to learn the reasons.
- II. The teachers of the schools should be transferred. NGO's and social workers should be appointed to provide medical facilities in these areas.

Options :

1. ✔ Only I follows
2. ✖ Only II follows

3. ✖ Either I or II follows

4. ✖ Both I and II follow

Question Number : 96 Question Id : 186075299 Question Type : MCQ Option Shuffling : No Is Question Mandatory : No Calculator : None Response Time : N.A Think Time : N.A Minimum Instruction Time : 0 Allowed Progression : Yes Number of Replay : 999 Play On Load : No Control Enable : Yes Time interval to replay(In Seconds) : 0 Allow Volume Control : No

Correct Marks : 1 Wrong Marks : 0.25

Select the number from among the given options that can replace the question mark (?) in the following series.

748, 765, 799, 850, ?

Options :

1. ✖ 901

2. ✔ 918

3. ✖ 923

4. ✖ 928

Question Number : 97 Question Id : 186075300 Question Type : MCQ Option Shuffling : No Is Question Mandatory : No Calculator : None Response Time : N.A Think Time : N.A Minimum Instruction Time : 0 Allowed Progression : Yes Number of Replay : 999 Play On Load : No Control Enable : Yes Time interval to replay(In Seconds) : 0 Allow Volume Control : No

Correct Marks : 1 Wrong Marks : 0.25

What will be approximate value of the following expression?

$56.67 + 30.6 \times 2.3 - 62.79 \div 9.3$

Options :

1. ✖ 129

2. ✖ 178

3. ✖ 123

4. ✔ 120

Question Number : 98 Question Id : 186075301 Question Type : MCQ Option Shuffling : No Is Question Mandatory : No Calculator : None Response Time : N.A Think Time : N.A Minimum Instruction Time : 0 Allowed Progression : Yes Number of Replay : 999 Play On Load : No Control Enable : Yes Time interval to replay(In Seconds) : 0 Allow Volume Control : No Correct Marks : 1 Wrong Marks : 0.25

Which two signs should be interchanged to make the following equation correct?

$$515 - 45 \times 40 \div 1200 + 40 = -1255$$

Options :

1. ✖ + and \times

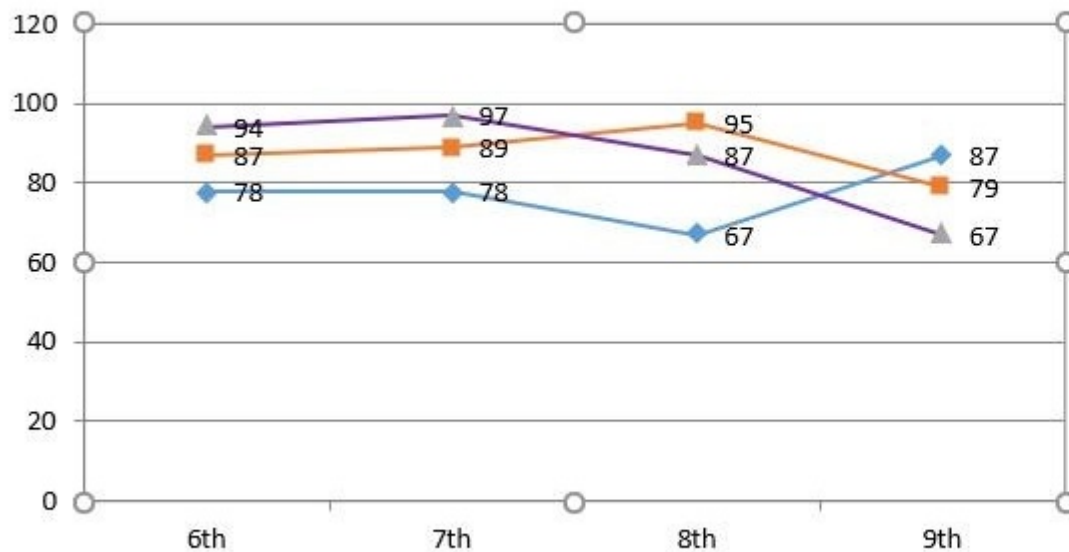
2. ✖ \div and $-$

3. ✔ \div and $+$

4. ✖ \div and \times

Question Number : 99 Question Id : 186075302 Question Type : MCQ Option Shuffling : No Is Question Mandatory : No Calculator : None Response Time : N.A Think Time : N.A Minimum Instruction Time : 0 Allowed Progression : Yes Number of Replay : 999 Play On Load : No Control Enable : Yes Time interval to replay(In Seconds) : 0 Allow Volume Control : No Correct Marks : 1 Wrong Marks : 0.25

The given line graph shows the percentage marks in different classes for three students. Study the line graph and answer the question that follows.



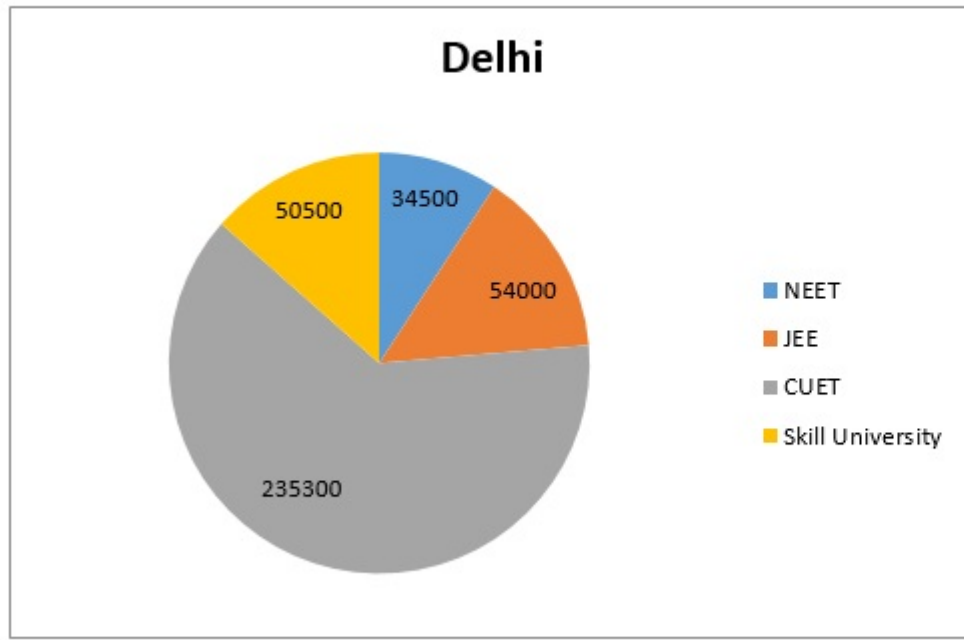
If maximum marks for all classes were 600, in which class did any of the student get 534 marks?

Options :

1. ✖ 6th
2. ✔ 7th
3. ✖ 8th
4. ✖ 9th

Question Number : 100 Question Id : 186075303 Question Type : MCQ Option Shuffling : No Is Question Mandatory : No Calculator : None Response Time : N.A Think Time : N.A Minimum Instruction Time : 0 Allowed Progression : Yes Number of Replay : 999 Play On Load : No Control Enable : Yes Time interval to replay(In Seconds) : 0 Allow Volume Control : No
Correct Marks : 1 Wrong Marks : 0.25

The given pie chart shows the number of applicants to different courses in Delhi. Study the pie chart and answer the question that follows.



If the total number of applicants is 3,74,300, what will be the central angle of NEET?

Options :

1. ✓ 33.18°
2. ✗ 52.23°
3. ✗ 48.56°
4. ✗ 226.4°